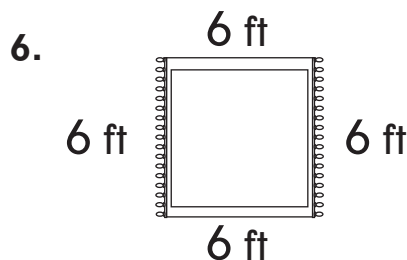
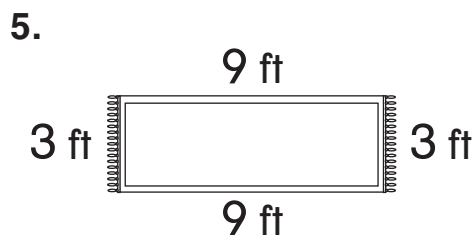
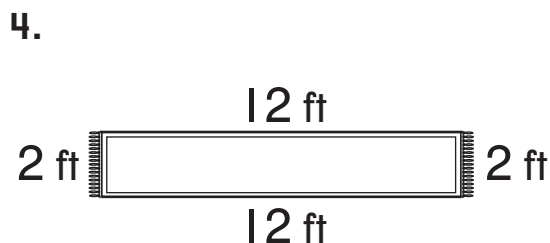
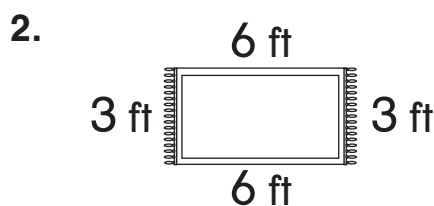
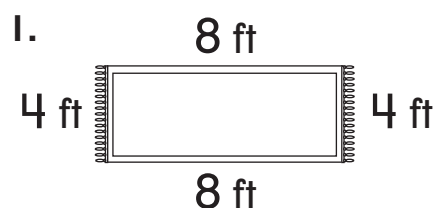


Challenge

Lots of Rugs, One Perimeter

Mrs. Ramsey bought a rug with a perimeter of 24 feet.

Find the perimeter of each rug below. Ring each rug that has the same perimeter as Mrs. Ramsey's rug.



Challenge

Lots of Rugs, One Perimeter

Mrs. Ramsey bought a rug with a perimeter of 24 feet.

Find the perimeter of each rug below. Ring each rug that has the same perimeter as Mrs. Ramsey's rug.

