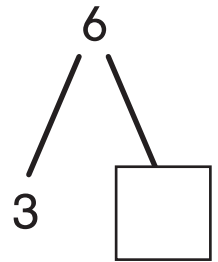


Challenge


Math Mountain Connections

Complete each Math Mountain and write all of the possible equations. Be careful—some Math Mountains only have two equations!

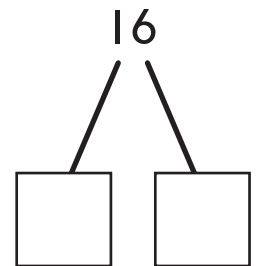
1. _____



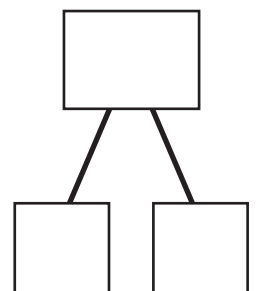
2. _____



3. _____



4. **Extend It** Look at these numbers: 6 11 5. Draw a Math Mountain for these numbers. Then write as many equations for that Math Mountain as you can.

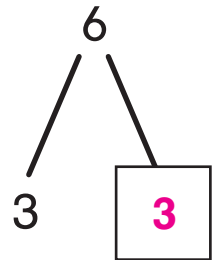


Challenge

Math Mountain Connections

Complete each Math Mountain and write all of the possible equations. Be careful—some Math Mountains only have two equations!

1. $6 - 3 = 3$ $3 + 3 = 6$



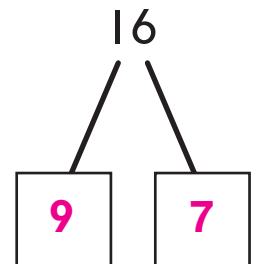
2. $7 + 6 = 13$ $13 - 7 = 6$

$6 + 7 = 13$ $13 - 6 = 7$



3. $7 + 9 = 16$ $16 - 7 = 9$

$9 + 7 = 16$ $16 - 9 = 7$



Answers may vary.

4. **Extend It** Look at these numbers: 6 11 5. Draw a Math Mountain for these numbers. Then write as many equations for that Math Mountain as you can.

$5 + 6 = 11$

$6 + 5 = 11$

$11 - 6 = 5$

$11 - 5 = 6$

