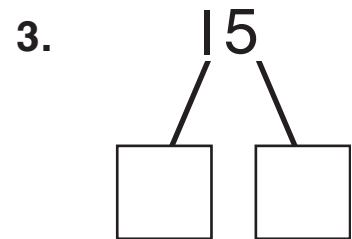
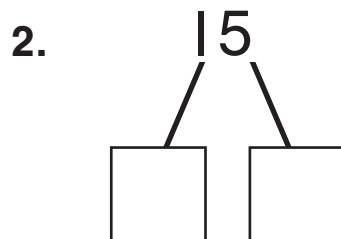
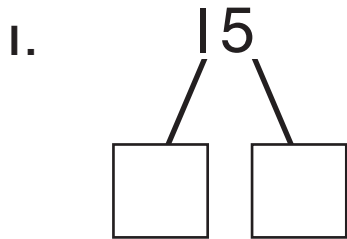


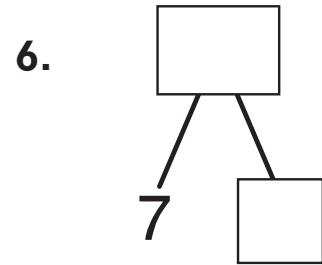
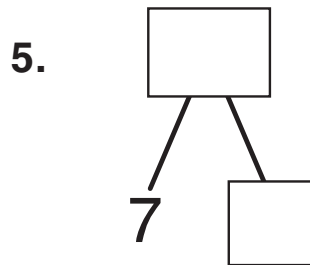
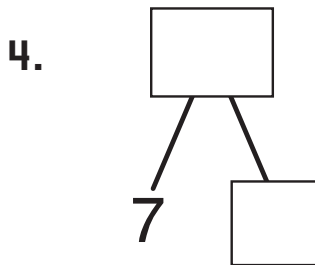
Challenge

Help Build the Mountain

Use different partners to complete the Math Mountains.



Complete the Math Mountains with three different teen totals.



7. **Extend It** Emily had 16 strawberries. She gave some to Beth. Now she has 8 strawberries. How many strawberries did Emily give to Beth?

Ring the equation that goes with the problem.

$$16 + 8 = \square \quad 16 + \square = 8 \quad 16 - \square = 8$$

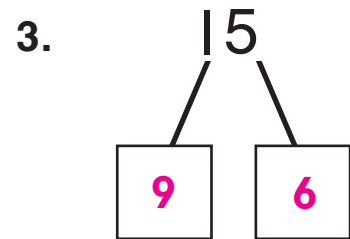
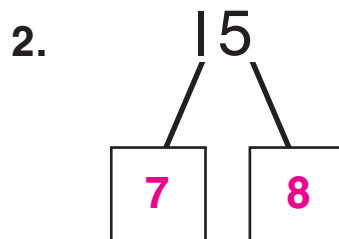
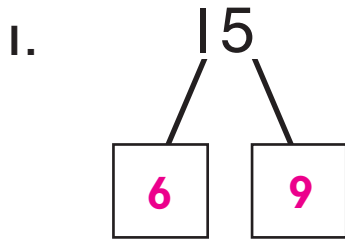
Write the answer to the problem.

strawberries.

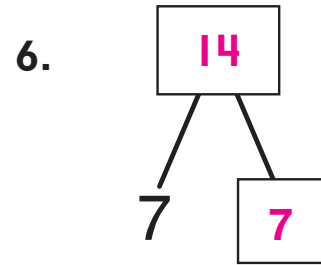
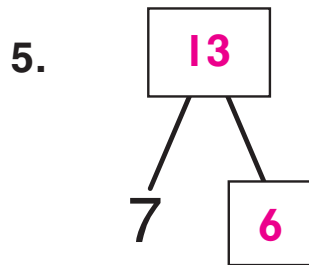
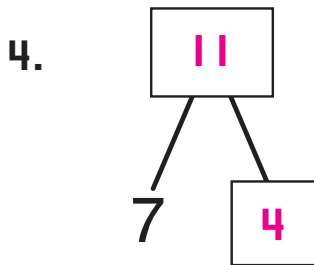
Challenge

Help Build the Mountain

Use different partners to complete the Math Mountains. **Sample answers given.**



Complete the Math Mountains with three different teen totals. **Sample answers given.**



7. **Extend It** Emily had 16 strawberries. She gave some to Beth. Now she has 8 strawberries. How many strawberries did Emily give to Beth?

Ring the equation that goes with the problem.

$16 + 8 = \square$

$16 + \square = 8$

$16 - \square = 8$

Write the answer to the problem.

8 strawberries.