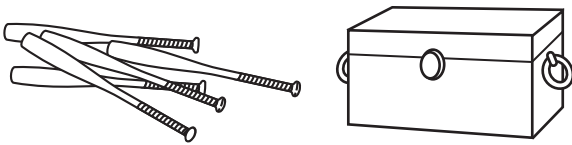


Challenge**It's in the Box!**

Count on to find the number of items inside the box.

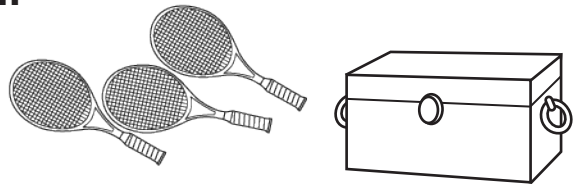
Complete each equation.

1.



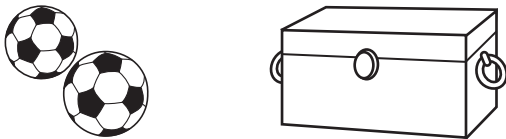
$$5 + \square = 8$$

2.



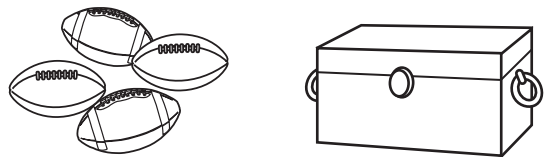
$$3 + \square = 7$$

3.



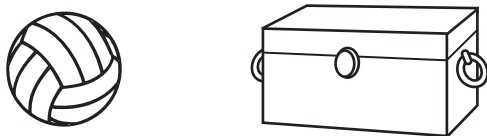
$$2 + \square = 9$$

4.




$$4 + \square = 8$$

5.



$$1 + \square = 6$$

6.



$$3 + \square = 5$$

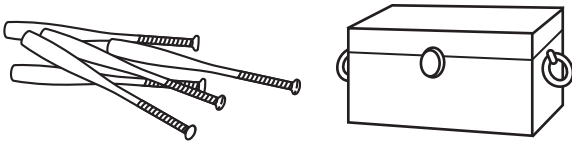
Challenge

It's in the Box!

Count on to find the number of items inside the box.

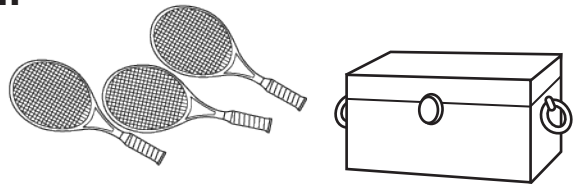
Complete each equation.

1.



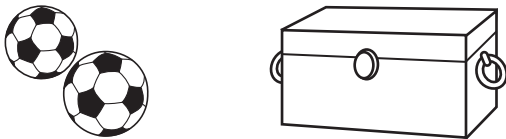
$$5 + \boxed{3} = 8$$

2.



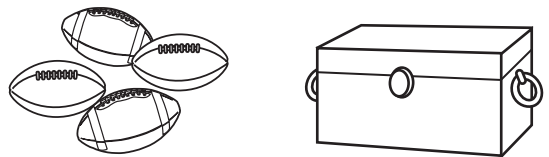
$$3 + \boxed{4} = 7$$

3.



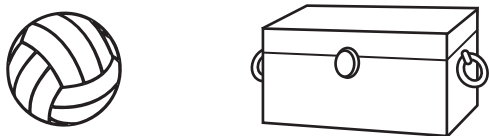
$$2 + \boxed{7} = 9$$

4.




$$4 + \boxed{4} = 8$$

5.



$$1 + \boxed{5} = 6$$

6.



$$3 + \boxed{2} = 5$$