


Challenge**Mr. Brown's Pet Store**

Mr. Brown has 7  .

He has 3  .

He has 6  .

Mr. Brown's Pet Store


- Make a bar graph.
Color one box for each pet.

Use the graph to solve. You may use Stair Steps.

2. How many more  than  ? _____

3. How many fewer  than  ? _____

4. How many more  than  ? _____

5. **Extend It** Mr. Brown gets 2  . Write a question about  and  and solve.

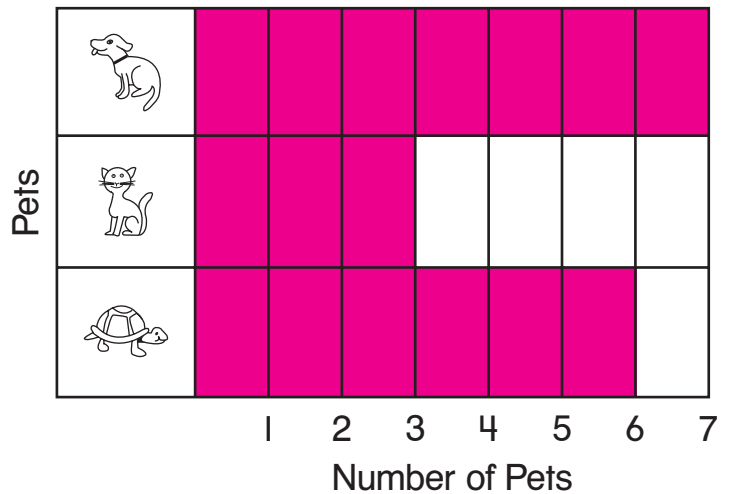
Challenge**Mr. Brown's Pet Store**

Mr. Brown has 7  .

He has 3  .

He has 6  .

Mr. Brown's Pet Store



- Make a bar graph.
Color one box for each pet.

Use the graph to solve. You may use
Stair Steps.

2. How many more  than  ? 4

3. How many fewer  than  ? 3

4. How many more  than  ? 1

5. **Extend It** Mr. Brown gets 2  . Write a question about  and  and solve.

Check children's work.
