

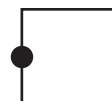
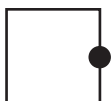
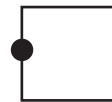
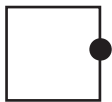
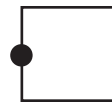
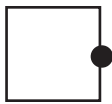
# Challenge

## Pictures and Numbers

Count how many in each set.

Write the number below the set.

Draw lines to match sets with the same number.



# Challenge

## Pictures and Numbers

Count how many in each set.

Write the number below the set.

Draw lines to match sets with the same number.



5



3



2



5



3



2