

Challenge**Break It Apart**

Draw the break-apart line. Show the 4-partners.
Write the numbers.

1.



2.



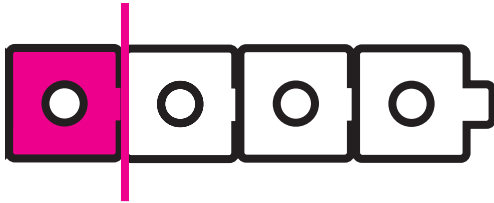
3.



Challenge**Break It Apart**


Draw the break-apart line. Show the 4-partners.
Write the numbers. **Order may vary.**

1.




$$1 + 3$$

2.



$$2 + 2$$

3.



$$3 + 1$$