

# Challenge

## Who Am I?

Read the clues.

Draw the shape.

<p>1. I have <b>3</b> sides. I have <b>3</b> corners.</p>	<p>2. I have <b>4</b> sides. I have <b>4</b> corners. I am not a <input type="checkbox"/>.</p>
<p>3. I have <b>0</b> sides. I have <b>0</b> corners.</p>	<p>4. I have <b>4</b> sides. I have <b>4</b> corners. I am not a <input type="checkbox"/>.</p>

5. **Write About It** Explain how the square and the rectangle are alike. Explain how they are different.

---







---

---

**Challenge****Who Am I?**

Read the clues.

Draw the shape.

<p>1. I have <b>3</b> sides. I have <b>3</b> corners.</p> 	<p>2. I have <b>4</b> sides. I have <b>4</b> corners. I am not a .</p> 
<p>3. I have <b>0</b> sides. I have <b>0</b> corners.</p> 	<p>4. I have <b>4</b> sides. I have <b>4</b> corners. I am not a .</p> 

5. **Write About It** Explain how the square and the rectangle are alike. Explain how they are different.

**Possible answer: Both shapes have 4 corners and**

**4 sides.**

**The rectangle is longer than the square.**