

Challenge

How Many in All?

Make up grouping stories.

Draw pictures to show the 5-group and the extra ones.

Write how many in all.

1. Draw hats.

| | | |
|--|--|------------|
| | | _____ hats |
|--|--|------------|

2. Draw gifts.

| | | |
|--|--|-------------|
| | | _____ gifts |
|--|--|-------------|

3. Write About It How can you use counters to show how many in all?



Challenge**How Many in All?**

Make up grouping stories.



Draw pictures to show the 5-group and the extra ones.

Write how many in all. **Possible answers shown.**

1. Draw hats.

| | | |
|---|---|----------------------------------|
|  |  | <p>_____ 7 _____ hats</p> |
|---|---|----------------------------------|

2. Draw gifts.

| | | |
|---|---|-----------------------------------|
|  |  | <p>_____ 9 _____ gifts</p> |
|---|---|-----------------------------------|

3. Write About It How can you use counters to show how many in all? **Possible Answer:**

I can use red counters to show the 5-group and

I can use yellow counters to show the extra ones.