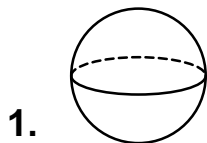


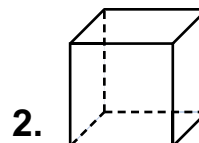
Solid Shapes



Number of faces _____

Number of edges _____

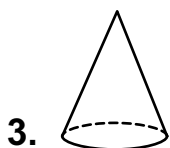
Name of shape _____



Number of faces _____

Number of edges _____

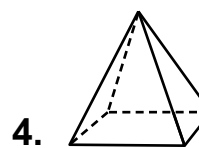
Name of shape _____



Number of faces _____

Number of edges _____

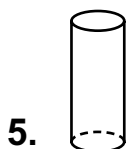
Name of shape _____



Number of faces _____

Number of edges _____

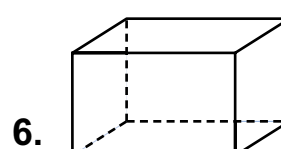
Name of shape _____



Number of faces _____

Number of edges _____

Name of shape _____



Number of faces _____

Number of edges _____

Name of shape _____