








Give and Take


<p>★</p>  <p>_____ + _____ = _____</p> <p>_____ - _____ = _____</p>	 <p>_____ - _____ = _____</p> <p>_____ - _____ = _____</p>
<p>2</p>  <p>_____ + _____ = _____</p> <p>_____ - _____ = _____</p>	 <p>_____ - _____ = _____</p> <p>_____ - _____ = _____</p>
<p>3</p>  <p>_____ + _____ = _____</p> <p>_____ - _____ = _____</p>	 <p>_____ - _____ = _____</p> <p>_____ - _____ = _____</p>

Directions: 1–3 Write the addition sentence and the related subtraction sentence.

Give and Take




$$2 + 1 = 3$$



$$3 - 1 = 2$$




$$4 + 2 = 6$$



$$6 - 2 = 4$$



$$5 + 3 = 8$$



$$8 - 3 = 5$$

Directions: 1–3 Write the addition sentence and the related subtraction sentence.