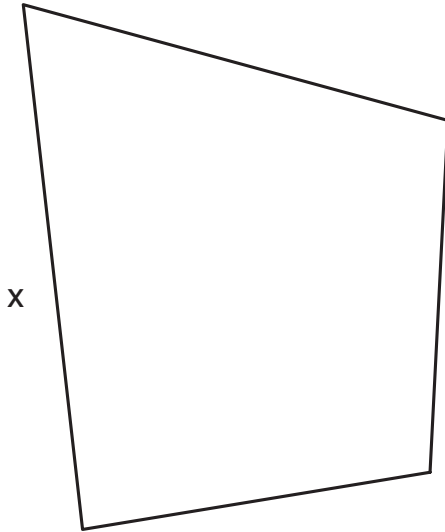


# What's Missing?

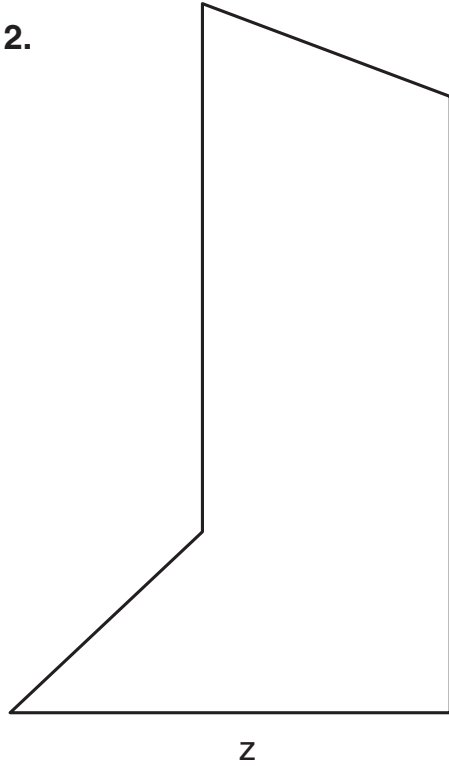
Directions: Write and solve an equation to find the value of each variable.

1.



Perimeter: 19 cm  
 Equation: \_\_\_\_\_  
 Solution: \_\_\_\_\_

2.



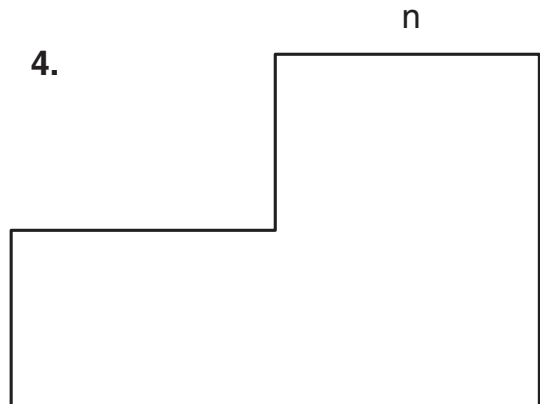
Perimeter: 24 cm  
 Equation: \_\_\_\_\_  
 Solution: \_\_\_\_\_

3.



Perimeter: 9 cm  
 Equation: \_\_\_\_\_  
 Solution: \_\_\_\_\_

4.



Perimeter: 20 cm  
 Equation: \_\_\_\_\_  
 Solution: \_\_\_\_\_