




Name _____ Date _____


Symmetry

TAKS Objective 3
TEKS 4.9A, 4.9C


1. When Trudy was at the beach she found some shells. How many lines of symmetry does the shell have?



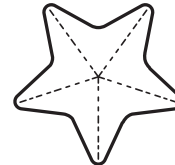
3. Eban has a beach towel with a design on it. How many lines of symmetry does the design have?




5. Trudy is drawing a design with a sun for a T-shirt. Draw a line of symmetry for the figure.



2. Trudy also found a starfish. How many lines of symmetry does the starfish have?



4. Look at the postcard that Eban sent to his friend. How many lines of symmetry does the postcard have?



6. Eban also is drawing a design with a surfboard for a T-shirt. Draw a reflection to complete the drawing.

