


Elapsed Time With a Stopwatch


TAKS Objective 4
TEKS 4.12B

Solve the problems below.

1. Kristen ran 1 mile. Her timing is shown below. How long did it take Kristen to run 1 mile?




2. Robin ran a quarter mile. Her timing is shown below. How long did it take Robin to run a quarter mile?



3. Antonio timed how long his sister could hold her breath underwater. He started timing at 3:04:00 P.M. The watch shows when he stopped timing. How long did Antonio's sister hold her breath underwater?



4. Namiko timed how long a carnival ride lasted. She started timing at 4:13:02. The watch shows when she stopped timing. How many minutes and seconds did the carnival ride last?



5. Willie timed how long it took him to ski down a slope. His timing is shown below. He started down the slope at 6:17:38 P.M. At what time did he end?



6. Willie's sister also skied the slope. Her timing is shown below. She started down the slope at 6:25:49 P.M. At what time did she end?