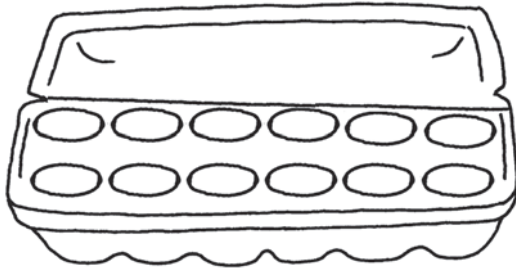


# Guess and Check

**TAKS Objective 4**  
**TEKS 2.9B, 2.12B**

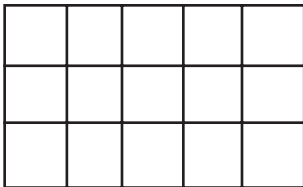
**Read. Use Guess and Check to Solve.**

1. Jan wants to put an egg in each space. How many eggs does she need?



\_\_\_\_\_ eggs

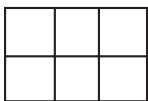
3. Lisa wants to make this quilt. How many square patches will she need?



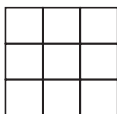
\_\_\_\_\_ square patches

5. Mrs. Robbins makes 2 quilts using a total of 14 squares. Which 2 quilts did she make?

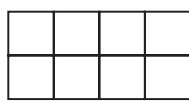
**A**



**B**

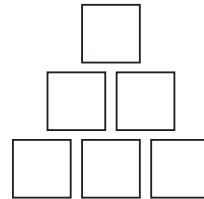


**C**



\_\_\_\_\_ and \_\_\_\_\_

2. Jan says this shape has an area of 4 square units. Brett says the shape has an area of 6 square units. Who is correct? Circle.



Jan

Brett

4. Maria is making a quilt. Each row has 6 squares. How many squares will she need for 2 rows?

\_\_\_\_\_ squares

6. Hans has 24 pennies. He wants to make a pattern of 6 rows. He wants the same number in each row. How many pennies will he have in each row?

\_\_\_\_\_ pennies