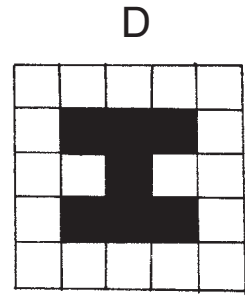
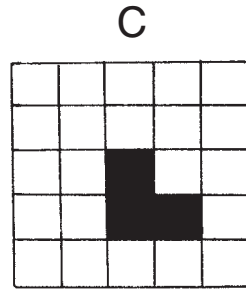




Area

TAKS Objective 4
TEKS 2.9B

Four friends draw shapes with different areas.
Read all of the clues. Then write the letter of the
shape each friend drew.



1. What is the area of shape B?

_____ square units

3. The shape that Arlene drew has an area of 3 square units.

Arlene's shape is _____.

5. Jeff's shape has an area that is 3 square units greater than Ned's shape.

Jeff's shape is _____.

2. What is the area of shape A?

_____ square units

4. Ned's shape has a area that is 1 square unit greater than Arlene's shape.

Ned's shape is _____.

6. Mandy's shape has an area that is 2 units less than Jeff's shape.

Mandy's shape is _____.