

# Compare Length


**TAKS Objective 4**  
**TEKS 2.9**

1. Marco says this piece of ribbon is longer than this piece of straw. Is his answer correct? Circle your answer.



Yes                      No

3. Which object is longer?

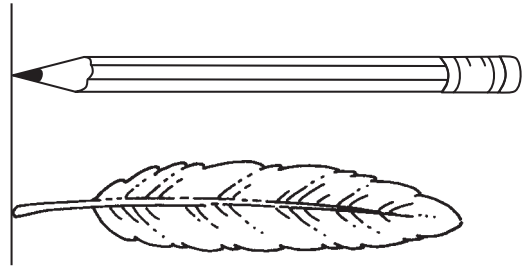


The \_\_\_\_\_ is \_\_\_\_\_  
than the \_\_\_\_\_.

5. Wally compares the lengths of his shoe and his finger. Which is longer?

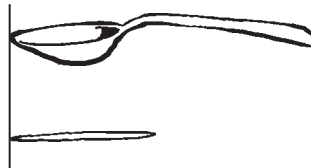
\_\_\_\_\_

2. Leslie says this feather is shorter than this pencil. Is she correct? Circle your answer.



Yes                      No

4. What is true about the lengths of the spoon and the toothpick?



The \_\_\_\_\_ is \_\_\_\_\_  
than the \_\_\_\_\_.

6. Dan compares the length of his bed to the length of his math book. Which is shorter?

\_\_\_\_\_