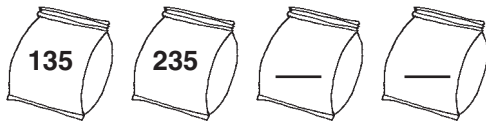


# Pattern and Place Value

**TAKS** Objective 2  
**TEKS** 2.5B

**Solve.**

1. The total number of blocks in the bags increases by 100 each time. Write the number of blocks in each bag.

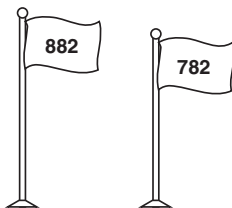


\_\_\_\_\_, \_\_\_\_\_

3. The numbers on the building increase by 100 each time. If the numbers shown are 212, 312, and 412, what are the next 3 numbers on the building?


\_\_\_\_\_, \_\_\_\_\_, \_\_\_\_\_

5. The numbers on the sign decrease by 100 each time. What are the next 4 numbers on the sign?



\_\_\_\_\_, \_\_\_\_\_, \_\_\_\_\_, \_\_\_\_\_

2. The number of sticks in the can increases by 10 each time. Write the number of sticks in each can.



\_\_\_\_\_, \_\_\_\_\_

4. The numbers on the tickets increase by 10 each time. What are the numbers on the next 3 tickets?



\_\_\_\_\_, \_\_\_\_\_, \_\_\_\_\_

6. Look at the pattern of the numbers on the card. What are the next 3 numbers?



\_\_\_\_\_, \_\_\_\_\_, \_\_\_\_\_