

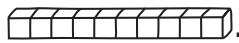
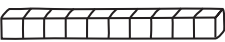


Trade Ones and Tens Game

TAKS Objective 1
TEKS 2.1A, 2.1B

Solve.

1. Macy has 32 . She trades 30  for . How many  does she have now?





_____ 

3. Becca counts buttons using hundreds. Write the missing numbers she counted.

100, 200, _____, _____,
_____, 600, 700, _____

5. Mrs. Rose is writing on the board a way to show the number 340 using only tens. What does she write on the board?

_____ tens

2. Noah has 54 . He trades 50  for 5 . How many  does he have left?

_____ 

4. There are 482 people at the fair. Later, 100 more people come to the fair. How many people are at the fair now?

_____ people

6. Max writes the number for 17 tens in his notebook. What number does he write?
