

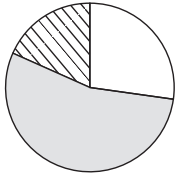


# Use a Spinner

**TAKS Objective 5**  
**TEKS 2.11C**

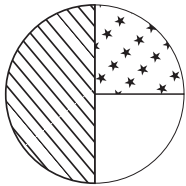
**Solve.**

1. Alex spins the spinner 20 times. What color is he more likely to land on?



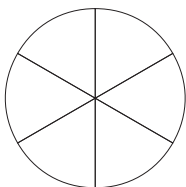
\_\_\_\_\_

3. Will this spinner more likely land on white, stripes or stars?

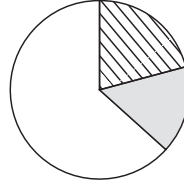


\_\_\_\_\_

5. Sam wants to make a spinner that will more likely land on the number 3. Fill in numbers on the spinner so Sam will be more likely to land on 3 when he spins the spinner 20 times.

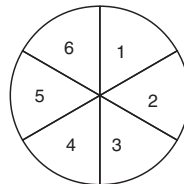


2. Carrie spins the spinner 20 times. What color is she more likely to land on?



\_\_\_\_\_

4. Margarite gets a point when she spins a number less than 5. The other player has to spin a number greater than 4. Who do you think will win?



\_\_\_\_\_

6. Tammie wants to make a spinner that will more likely land on the number 1. Fill in numbers on the spinner so Tammie will more likely land on 1 when she spins the spinner 20 times.

