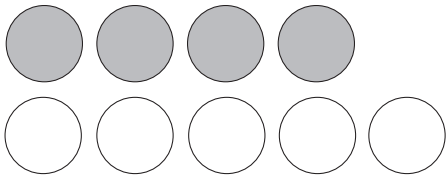


Turn-Around Addition Facts

TAKS Objective 1
TEKS 2.3A


Read. Solve.

1. Hal has 4 gray marbles and 5 white marbles. How many marbles does he have in all?



$4 + 5 = \underline{\quad\quad}$ marbles

3. Sue has 6 stamps. She collects 3 more stamps. What are two number sentences to show how many stamps Sue has now?



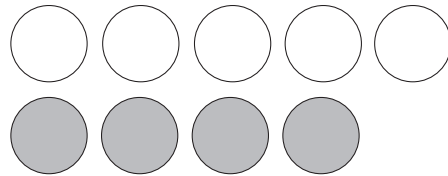
$\underline{\quad\quad} + \underline{\quad\quad} = \underline{\quad\quad}$ stamps

$\underline{\quad\quad} + \underline{\quad\quad} = \underline{\quad\quad}$ stamps

5. 4 children are sitting and 2 children are standing in the library. One child that was sitting is now standing. How many children are in the library?

$\underline{\quad\quad}$ children

2. What is another way to show the number of marbles Hal has?



$5 + \underline{\quad\quad} = \underline{\quad\quad}$ marbles

4. Ray catches 4 fish in the morning. He catches 2 more fish in the afternoon. What are two number sentences to show how many fish Ray catches today? Draw a picture if that will help you.

$\underline{\quad\quad} + \underline{\quad\quad} = \underline{\quad\quad}$ fish

$\underline{\quad\quad} + \underline{\quad\quad} = \underline{\quad\quad}$ fish

6. On the first shelf are 5 books. On the second shelf are 3 books. Ted takes one book from the first shelf and moves it to the second shelf. How many books are on both shelves?

$\underline{\quad\quad}$ books