


# Growing Patterns

**TAKS Objective 2**  
**TEKS 2.6C**

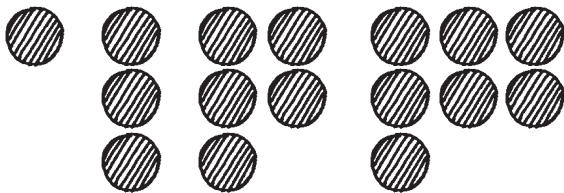
Read. Then solve.

1. Rosa makes a paper pattern. Each piece of paper has flowers on it. How many flowers will be on the next paper in the pattern?



\_\_\_\_\_ flowers

3. Kurt makes a pattern of dots. How many dots will come next in the pattern?




\_\_\_\_\_ dots

5. Kristi is playing a jump-rope counting game. She says, "5, 10, 15, 20." If this pattern continues, what number comes next?


\_\_\_\_\_

2. Bill is stacking the cans from the food drive. If he continues the pattern, how many cans will be in the next stack?



\_\_\_\_\_ cans

4. Kelly makes this pattern of stickers. How many stickers will come next in the pattern?



\_\_\_\_\_ stickers

6. Ann writes this pattern of numbers on the board. If the pattern continues, what number will Ann write next?

15, 25, 35, 45, 55

\_\_\_\_\_