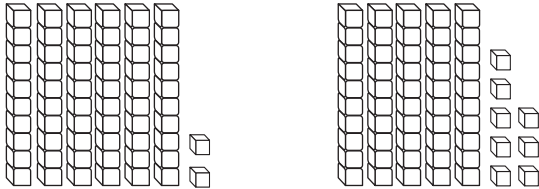


Compare 50 through 99

TAKS Objectives 1, 2
TEKS 1.1A, 1.5C




Compare.

1. Ellis counts two sets of blocks. Circle the set that has less.



3. Jane baked **64** cookies and **52** muffins. Did she bake a greater number of cookies or muffins?

5. Sara collected **92** cans for recycling. Anil collected **86** cans. Andy collected a greater number of cans than Anil, but less than Sara. How many cans could Andy have collected?

2. Hana has **64** . Jack has **52** . Who has a greater number of ?

4. On Saturday, **76** people visited the zoo. On Sunday, **95** people visited the zoo. On which day did fewer people visit the zoo?

6. The first grade had a bake sale. They sold **375** cookies, **96** brownies, and **250** cupcakes. Did they sell more cookies or cupcakes?
