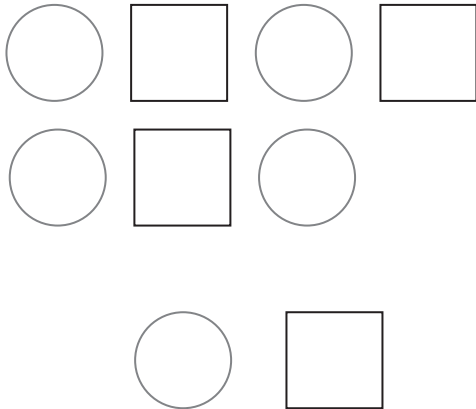


Find a Pattern


Objective 2
TEKS 1.4

Solve.

1. Lily makes this pattern.
Circle what comes next.



3. Luke makes this pattern.




Draw what comes next.


5. Kent makes a pattern with
15 and **12**.

Show what his pattern
looks like.

2. Chu makes this pattern.
Circle what comes next.



4. Kiki makes this pattern.



Draw what comes next.

6. Ella makes a pattern with
19 and **13**.

Show what her pattern
looks like.