



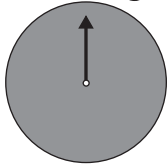
# Probability

TAKS Objective 5  
TEKS 1.9A, 1.10B

**Predict what will happen. Circle your answer.**

1. Dora spins the spinner one time.

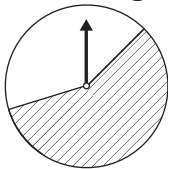
What are the chances of it landing on gray?



certain      impossible

3. Kyra spins the spinner one time.

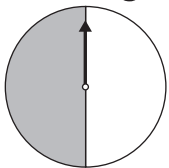
What are the chances of it landing on white?



more likely      less likely

5. Lin spins the spinner one time.

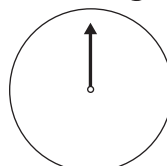
What are the chances of it landing on gray?



more likely      equally likely  
less likely

2. Jose spins the spinner one time.

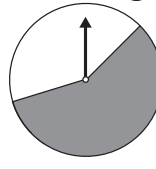
What are the chances of it landing on gray?



certain      impossible

4. Arlo spins the spinner one time.

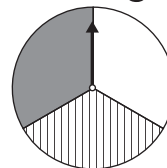
What are the chances of it landing on gray?



more likely      less likely

6. Fran spins the spinner one time.

What are the chances of it landing on striped?



more likely      equally likely  
less likely