



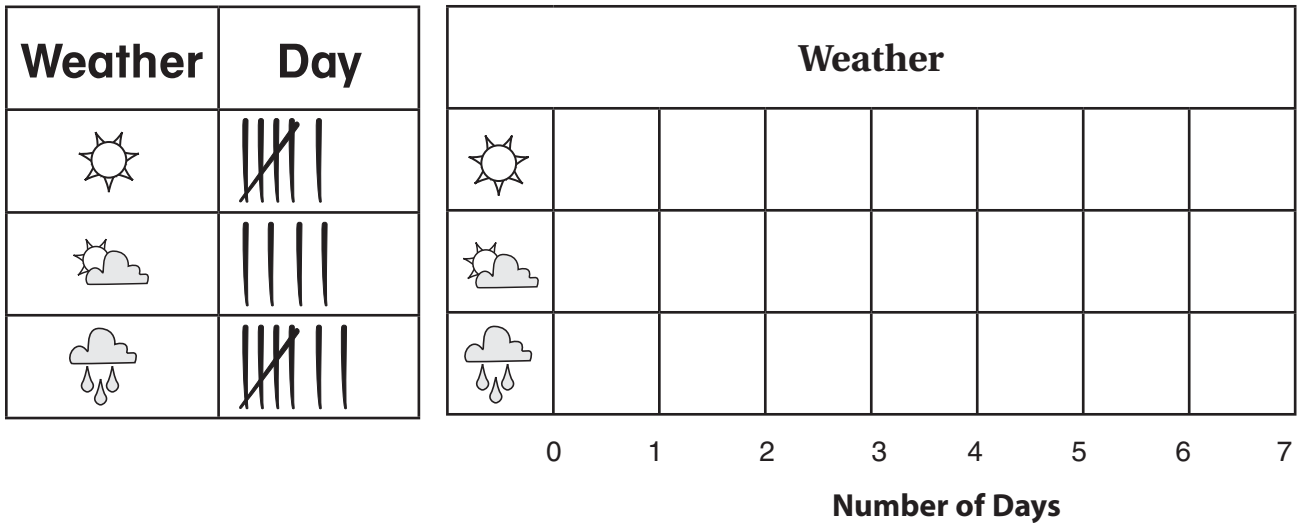
Name \_\_\_\_\_ Date \_\_\_\_\_

# Make a Bar-Type Graph

**TAKS Objective 5**  
**TEKS 1.9A, 1.9B, 1.10A**

Use the tally chart to make a bar-type graph.  
Color one box for each tally.

Then solve.






1. How many boxes do you color for  days?


\_\_\_\_\_ boxes

3. How many days are  days?



\_\_\_\_\_ days

5. How many fewer  days are there than  and  days?




\_\_\_\_\_ fewer days

2. How many boxes do you color for  days?

\_\_\_\_\_ boxes

4. How many more  than  days are there?

\_\_\_\_\_ more days

6. How many more  and  days are there than  days?

\_\_\_\_\_ more days