


Make a Picture Graph


TAKS Objective 5
TEKS 1.10A

Read the picture graph.

Then solve.

Each  stands for one child.






1. How many children carry  ?


_____ children

3. How many more  than  are there?

_____ more

5. How many more children play  and  than carry a  ?





_____ more

2. How many children play  ?

_____ children

4. How many  and  are there in all?

_____ in all

6. More children join the parade. There are 4 more  and 2 more . Now how many more  than  ?

_____ more