







Make a Tally Chart

TAKS Objective 5
TEKS 1.9A, 1.10A


Use the picture.

Complete the tally chart.


Things That Fly	
	/
	
	/





Use the tally chart to solve.

1. Timmy counts the .
How many does he count?



_____ 




2. Flor counts the .
How many does she count?




_____ 

3. Deb counts the .
How many does she count?

_____ 

4. Sal counts  and .
How many does he count in all?

5. How many more  and  are there than ?

6. How many more  and  are there than ?
