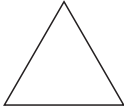
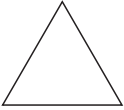
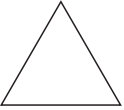
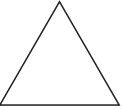
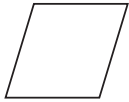
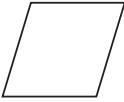
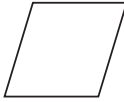





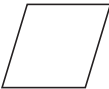
Make a Real-Object Graph



TAKS Objective 5
TEKS 1.9B, 1.10A

Pattern Block Sort		
Pedro		  
Kara		 
Cindy		

Use the graph to solve.

1. Kara has . How many does she have?


_____ 



3. How many fewer  than  are there?

5. Cindy and Kara put their blocks together. How many blocks do they have in all?

_____ blocks

2. Pedro has . How many does he have?

_____ 

4. How many more  than  are there?

6. Kara and Pedro put their blocks together. How many blocks do they have in all?

_____ blocks