




Create and Solve

TAKS Objective 6
TEKS 1.11A

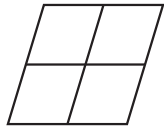
1. Terri colors this figure.



She colors **1** part blue.
She colors **1** part green.
Write the answer.

_____ out of _____ parts is blue.

3. Quilla colors this figure.



She colors **2** parts blue.
She colors **2** parts green.
Write the answer.

_____ out of _____ parts are green.

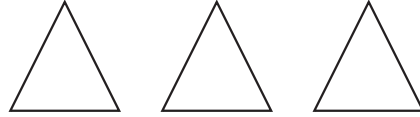
5. Zack colors these figures.



He colors **4** squares green.
He colors the rest yellow.
Write the answer.

_____ out of _____ squares are yellow.

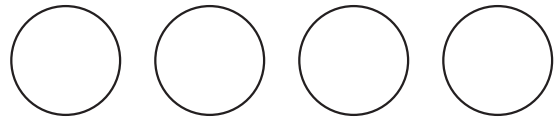
2. Harry colors these figures.



He colors **2** triangles red.
He colors **1** triangle orange.
Write the answer.

_____ out of _____ triangles are red.


4. Shelly colors these figures.



She colors **3** circles orange.
She colors **1** circle brown.
Write the answer.

_____ out of _____ circles is brown.

6. Max colors this figure.



He colors **2** parts yellow.
He colors the rest red.
Write the answer.

_____ out of _____ parts are red.