



Three and Four Equal Parts

TAKS Objective 1
TEKS 1.2A

Solve.

1. Milos colors this figure.



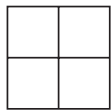
He colors **1** part blue.

He colors **2** parts red.

Write the answer.

_____ out of _____ parts
are red.

3. Jack colors this figure.



He colors **1** part blue.

He colors **3** parts yellow.

Write the answer.

_____ out of _____ parts
are yellow.

5. Kara colors this figure.



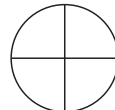
She colors **3** parts blue.

She colors the rest orange.

Write the answer.

_____ out of _____ parts
are orange.

2. Dina colors this figure.



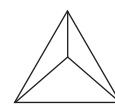
She colors **2** parts green.

She colors **2** parts orange.

Write the answer.

_____ out of _____ parts
are green.

4. Owen colors this figure.



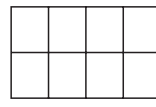
He colors **2** parts red.

He colors **1** part green.

Write the answer.

_____ out of _____ parts
are red.

6. Diane colors this figure.



She colors **2** parts yellow.

She colors the rest green.

Write the answer.

_____ out of _____ parts
are green.