






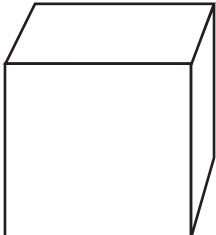
Identify Faces of a Three-Dimensional Figure

TAKS Objective 3
TEKS 1.6C**Solve.**

1. Ben has a  .

Circle the picture that shows a face of his solid.

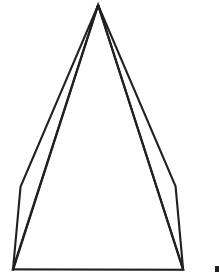


3. Anita has a  .


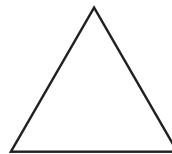
What is the shape of the faces?


5. Lalo has a cube and a rectangular prism.
What is the shape of a face that they both have?

2. Jen has a



Circle the picture that shows a face of her solid.



4. Tyler has a  .

What is the shape of the face?

6. Emily has a cone and a cylinder.
What is the shape of the face that they both have?
