

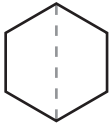


# Combining Figures

**TAKS Objective 3**  
**TEKS 1.6D**

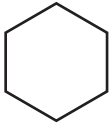
Use pattern blocks to solve.

1. Sara has 3 .  
How many does she use to make this figure?



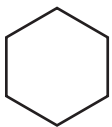
\_\_\_\_\_

3. Chu has 5 and 2 .  
She uses 5 blocks to make this figure. How many of each block does she use?



\_\_\_\_\_ \_\_\_\_\_

5. Andy has 6 and 4 .  
Tell 2 ways that he can build this figure.



Way 1:

Way 2:

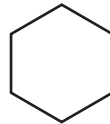
\_\_\_\_\_ \_\_\_\_\_   
\_\_\_\_\_ \_\_\_\_\_

2. Dave has 8 .  
How many does he use to make this figure?



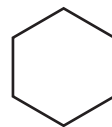
\_\_\_\_\_

4. Mia has 2 and 5 .  
She uses 4 blocks to make this figure. How many of each block does she use?



\_\_\_\_\_ \_\_\_\_\_

6. Becky has 5 and 4 .  
Tell 2 ways that she can build this figure.



Way 1:

Way 2:

\_\_\_\_\_ \_\_\_\_\_   
\_\_\_\_\_ \_\_\_\_\_