

Sorting Two-Dimensional Figures

TAKS Objective 3
TEKS 1.6C

Solve. Draw a picture to help.

1. Dave has 1 .



How many corners does his plane figure have?

_____ corners

3. Lea has 2 .

How many corners do her plane figures have in all?

_____ corners

5. Amed has 3  and 3 .

How many sides do his plane figures have in all?

_____ sides

2. Deb has 1 .



How many sides does her plane figure have?

_____ sides

4. Dan has 2 .

How many sides do his plane figures have in all?

_____ sides

6. Teri has 2  and 1 .

How many corners do her plane figures have in all?

_____ corners