







Choose the Operation

TAKS Objectives 1, 6
TEKS 1.3A, 1.3B, 1.11A, 1.11C

Choose the operation.
Solve.

1. The  has 5 .
It eats 3 .
How many  does  have left?






5 ○ 3 = _____ 


3. There are 6 birds in the nest.
Then 2 more birds fly to the nest.
How many birds are in the nest now?

_____ ○ _____ ○ _____
birds

5. Tess has 4 yellow hair bows and 6 red hair bows.
She loses 3 red hair bows.
How many red hair bows does Tess have left?

_____ ○ _____ ○ _____ red
hair bows

2. The  has 4 .
It gets 3 more .
How many  does  have now?

4 ○ 3 = _____ 

4. There are 9 frogs in the pond.
Then 7 frogs hop away.
How many frogs are left in the pond?

_____ ○ _____ ○ _____
frogs

6. Juan has 6 big books and 8 small books. He gets 5 more big books at the library. How many big books does Juan have now?

_____ ○ _____ ○ _____
big books