







Using Pictures to Subtract

TAKS Objective 1
TEKS 1.3B

Write the subtraction fact two ways.

Solve.

1. Tad has 5 .
 Then 2  swim away.
 How many  are left?
- $$\begin{array}{r} 5 \\ - 2 \\ \hline \end{array} \quad 5 - 2 = \underline{\quad}$$

2. Tara has 7 . Then 4  blow away. How many  are left?
- $$\begin{array}{r} 7 \\ - 4 \\ \hline \end{array} \quad 7 - 4 = \underline{\quad}$$

3. Mimi has 8 apples.
 She gives 4 apples away.
 How many apples does
 Mimi have left?
- _____

4. Kim has 9 hair bows.
 She gives 2 to a friend.
 How many hair bows does
 Kim have left?
- _____

5. Bob has 10 red pencils and
 7 green pencils.
 He loses 3 red pencils.
 How many red pencils does
 Bob have left?
- _____

6. Luis has 12 big shells
 and 11 small shells.
 He gives 5 small shells
 to Sal.
 How many small shells does
 Luis have left?
- _____