

Choose the Operation

TAKS Objective 1
TEKS 1.3B

Write the sentence.

Solve.

1. There are **5** cows in the barn.
3 cows go out.
How many cows are in the barn now?




$$5 - 3 = \underline{\quad} \text{ cows}$$

3. Dora has **4** shells.
She gets **3** more at the beach.
How many shells does Dora have now?

$$\underline{\quad} \oplus \underline{\quad} \ominus \underline{\quad} \text{ shells}$$

5. Zoe had **8** red balloons and **6** green balloons.
Then **4** green balloons popped.
How many green balloons does Zoe have now?

$$\underline{\quad} \ominus \underline{\quad} \ominus \underline{\quad} \text{ green balloons}$$

2. Han has **3** 
He finds **1** more 
How many  does Han have now?

$$3 + 1 = \underline{\quad} \img alt="quarter coin" data-bbox="770 342 810 372"/>$$

4. There are **8** pigs in the pen.
3 pigs leave the pen.
How many pigs are in the pen now?

$$\underline{\quad} \ominus \underline{\quad} \ominus \underline{\quad} \text{ pigs}$$

6. Eric has **10** toy cars and **5** toy trucks.
Dad gives him **1** more toy car.
How many toy cars does Eric have now?

$$\underline{\quad} \oplus \underline{\quad} \ominus \underline{\quad} \text{ toy cars}$$