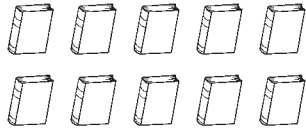


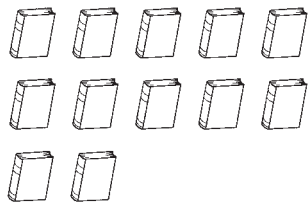
Order 11 through 20

TAKS Objective 1
TEKS 1.1A

1. Jay has **10** books.



Rosa has **12** books.



Who has more books?

3. Sal has **17** flowers.

Nat has **14** flowers.

Vinny has **18** flowers.


Who has the least number of flowers?

5. Ann has **9** yellow stickers and **5** red stickers.


Jay has **8** blue stickers and **8** green stickers.

Who has more stickers?

2. Keri has **4** cards.



Ty has **9** cards.



Who has fewer cards?

4. Lyn has **13** shells.

Deb has **16** shells.

Tami has **15** shells.

Who has the greatest number of shells?

6. Judy has **7** green hair bows and **6** red hair bows.

Missy has **5** blue hair bows and **6** yellow hair bows.

Who has fewer hair bows?
