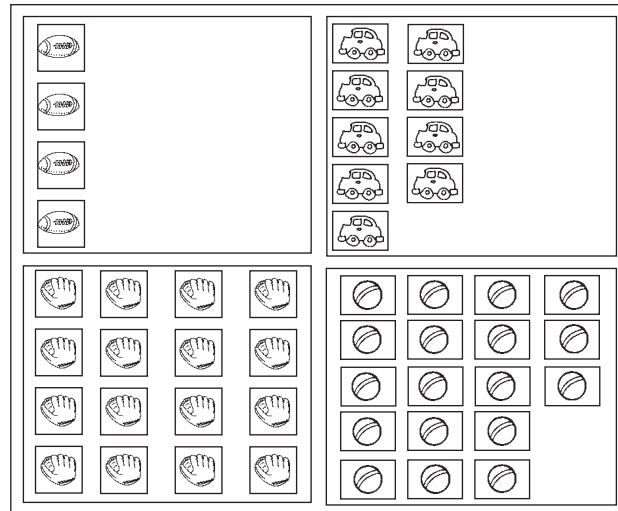


# Numbers 16 through 20

**TAKS** Objective 1  
**TEKS** 1.1D

## Nick's Stickers



Use Nick's Stickers to solve.



1. How many  does Nick have?

\_\_\_\_\_ 

3. How many  does Nick have?

\_\_\_\_\_ 

5. How many  +  does Nick have?

\_\_\_\_\_  

2. How many  does Nick have?

\_\_\_\_\_ 

4. How many  does Nick have?

\_\_\_\_\_ 

6. How many  +  does Nick have?

\_\_\_\_\_  