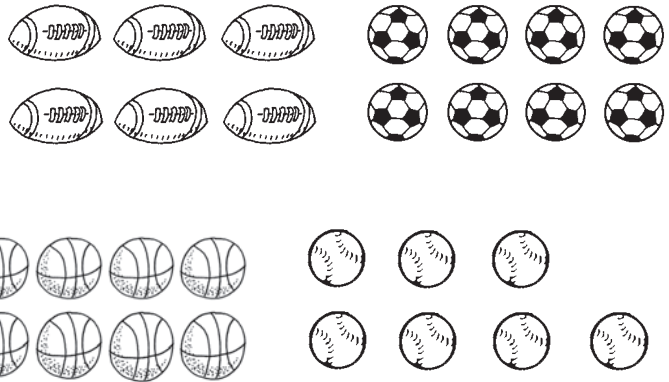


# Numbers 6 through 10


**TAKS** Objective 1  
**TEKS** 1.1D


Count. Write the number.

The school gym has the balls in the picture.





1. How many  does the gym have?

\_\_\_\_\_ 

3. How many  does the gym have?

\_\_\_\_\_ 

5. How many  +  does the gym have?



\_\_\_\_\_  

2. How many  does the gym have?

\_\_\_\_\_ 

4. How many  does the gym have?

\_\_\_\_\_ 

6. How many  +  does the gym have?

\_\_\_\_\_ 