



Numbers 0 through 5


TAKS Objective 1
TEKS 1.1D

Count. Write the number.


Jon has a fish tank like the one in the picture.

How many  does Jon have?

_____ 3 _____



1. How many  does Jon have?

_____ 

2. How many  does Jon have?

_____ 

3. How many  does Jon have?


_____ 

4. How many  does Jon have?

_____ 

5. How many  +  does Jon have?

_____  

6. How many  +  does Jon have?

_____  