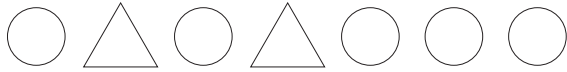




Problem Solving: Find a Pattern

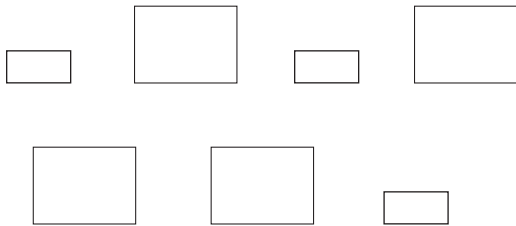
TAKS Objective 2
TEKS 1.4A**Solve.**

1. Barry makes this pattern.



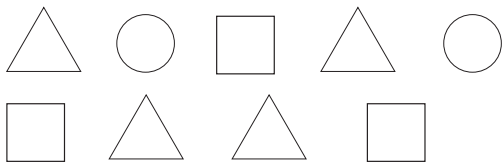
Circle the shape in the pattern that is wrong.

3. Mimi makes this pattern.



Circle the shape in the pattern that is wrong.

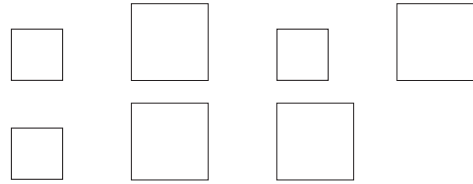
5. Ian makes this pattern.



Circle the shape in the pattern that is wrong.

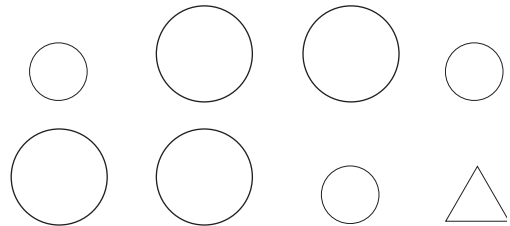
Draw the shape it should be.

2. Lea makes this pattern.



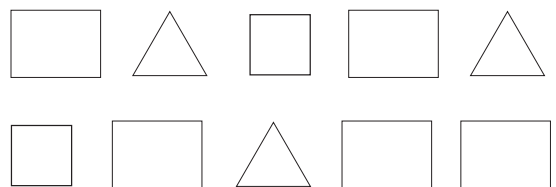
Circle the shape in the pattern that is wrong.

4. Junji makes this pattern.



Circle the shape in the pattern that is wrong.

6. Cindy makes this pattern.



Circle the shape in the pattern that is wrong.

Draw the shape it should be.