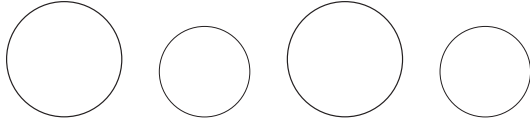


Size Patterns

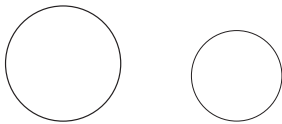
TAKS Objective 2
TEKS 1.4A

Solve.

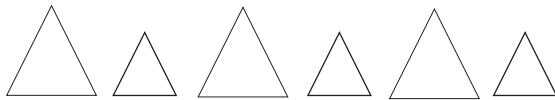
1. Keri makes this pattern.



Circle what comes next.

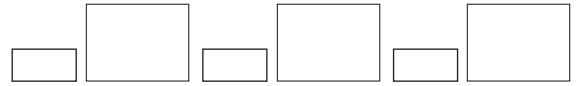


3. Reba makes this pattern.



Draw the next **2** shapes in her pattern.

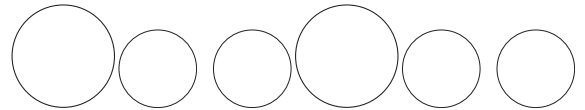
2. Tommy makes this pattern.



Circle what comes next.

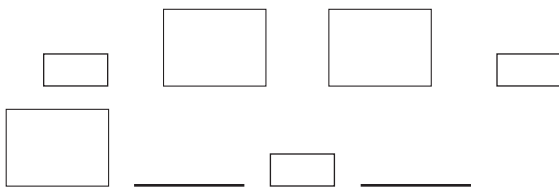


4. Harry makes this pattern.



Draw the next **2** shapes in his pattern.

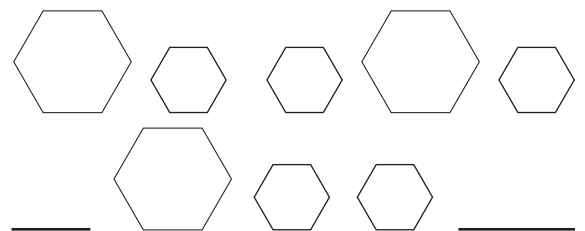
5. Mark makes this pattern.



Draw the missing figures.



6. Donna makes this pattern.



Draw the missing figures.