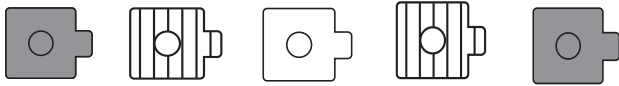


Color Patterns

TAKS Objective 2
TEKS 1.4A

Solve.

1. Amy makes this pattern.

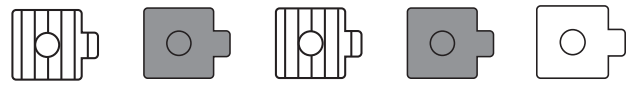


She did not color one cube.

Circle the correct color cube.



2. Gary makes this pattern.

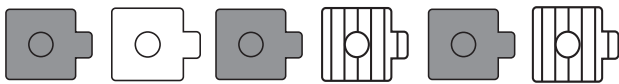


He did not color one cube.

Circle the correct color cube.



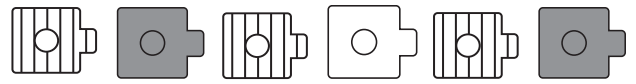
3. Brad makes this pattern.



He did not color one cube.

Color that cube.

4. Rosa makes this pattern.



She did not color one cube.

Color that cube.

5. Kate makes this pattern.



She left out one shape.

Draw the missing shape.

6. Aldo makes this pattern.



He left out one shape.

Draw the missing shape.