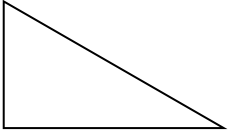


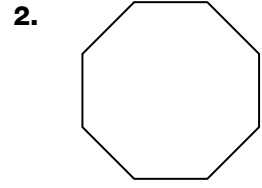
Classify Plane Figures


Tell whether each figure is a polygon. If it is, write its name.





**Yes, it is a polygon.
It is a triangle.**

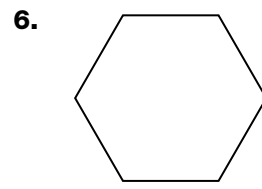


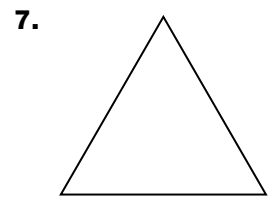












Problem Solving

Use the plane figures at the right to answer each question.

8. Which of the figures are polygons?

9. Which of the figures are irregular polygons?

