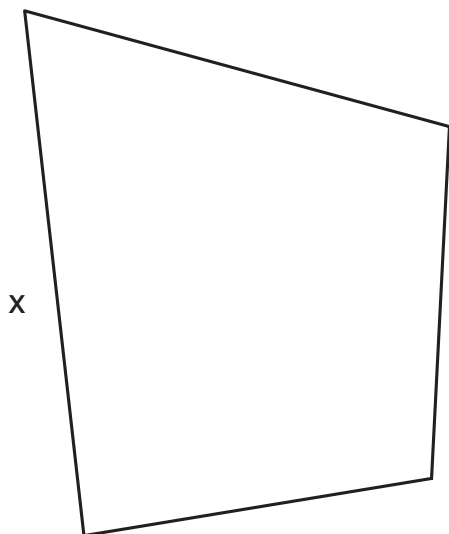


What's Missing?

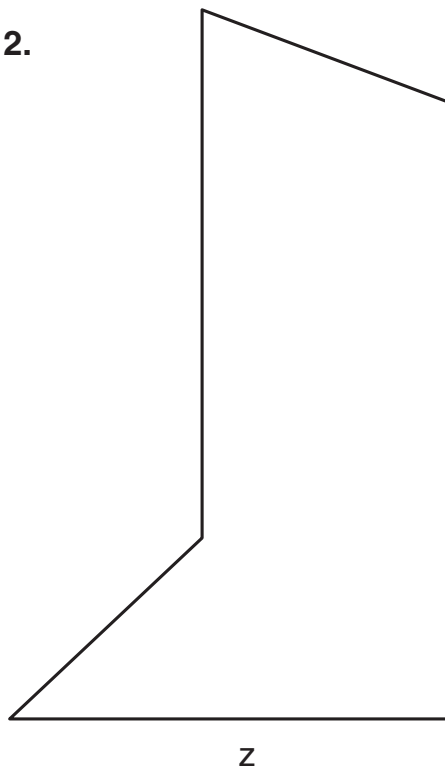
Directions: Write and solve an equation to find the value of each variable.

1.



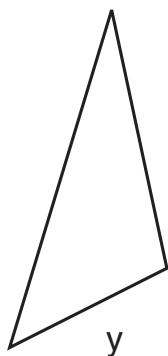
Perimeter: 19 cm
 Equation: _____
 Solution: _____

2.



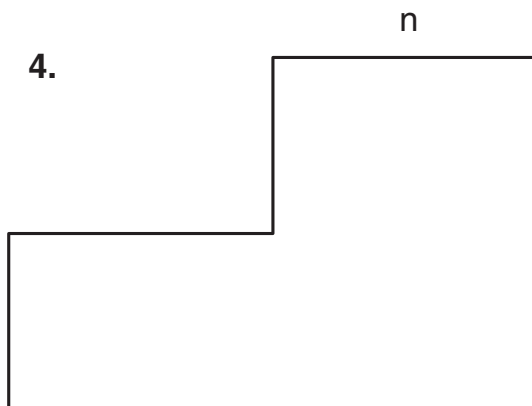
Perimeter: 24 cm
 Equation: _____
 Solution: _____

3.



Perimeter: 9 cm
 Equation: _____
 Solution: _____

4.



Perimeter: 20 cm
 Equation: _____
 Solution: _____