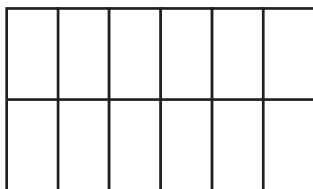




Use a Picture

CA Standards
KEY NS 4.2, MR 1.2

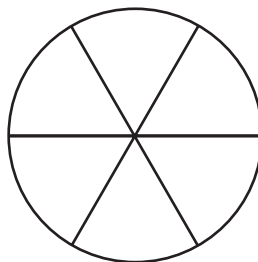
1. Cassie cuts a cake into 12 equal pieces. Her friends eat 8 pieces of the cake. What fraction of the cake do they eat?



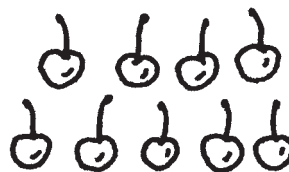
3. Ellen eats 4 pieces of a cake that was cut into 8 equal pieces. What fraction of the cake was not eaten by Ellen?

5. Lisa makes a bracelet with 12 beads. 3 beads are red, 3 beads are white, and 3 beads are blue. The remaining beads are clear. What fractional part of the bracelet is made from clear beads?

2. Darla cuts an apple into 6 equal pieces. She eats 5 pieces. What fractional part of the apple did she eat?



4. Darren eats $\frac{4}{10}$ of the cherries. Robert eats $\frac{5}{10}$ of the cherries. Was the amount of cherries eaten closer to all of the cherries, half of the cherries, or none of the cherries?



6. Kim uses 15 shells to make a picture frame. $\frac{2}{3}$ of the shells she uses are white. The remainder are yellow. How many shells used are yellow?
