



Name _____

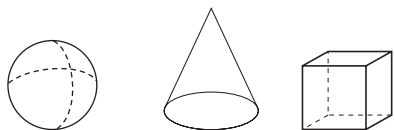
Date _____

Geometric Patterns

CA Standards
KEY SDAP 2.0, SDAP 2.1

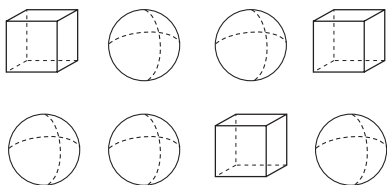
Solve.

1. I am a solid figure with 5 faces, 8 edges, and 5 vertices. Which of the figures shown below am I?

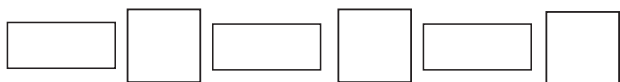


sphere cone cube

3. Leo made a beaded bracelet showing the pattern below. Draw the shape that comes next in the pattern.



5. Mr. Yi drew the pattern below on the board. Draw the same type of pattern using solid shapes. Then show which solid shape would most likely come next.



2. Look at the shapes below. Draw the pattern unit.



4. John traced the faces of solid shapes to design a border for his bedroom. Which solid shape will he most likely trace next to continue the pattern?



6. Natalia designs a pattern for art class. Draw the shape that will come next.

