

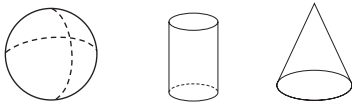


Compare Plane and Solid Shapes

CA Standard
KEY MG 2.1

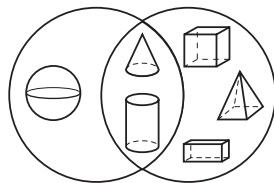
Solve.



1. Tony sorts his blocks and puts together the shapes shown below. How are the shapes alike?



3. Ellen puts her alphabet block in the same basket as her toy pyramid. What is her reason for sorting them together?

5. Brian drew a Venn diagram to show how he sorted solid shapes. How are the shapes in the overlapping part of the Venn diagram alike?



2. Sandy compares a  and a . How are the shapes alike?

4. Alana places together a box of tissues, a can of soup and a number cube. How are the shapes Alana sorted alike?

6. Draw a Venn Diagram on a separate piece of paper to sort the shapes below. Label each section to show how the shapes are alike.

