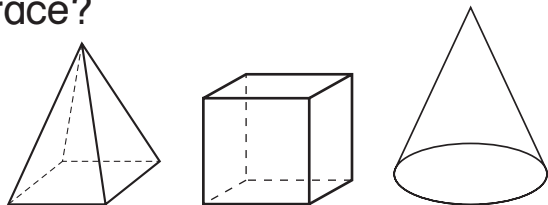


Name _____ Date _____


Identify Faces

CA Standard
 KEY MG 2.1


1. Miguel draws 2 different plane shapes by tracing the faces from 1 solid shape. Which of the shapes below did Miguel trace?



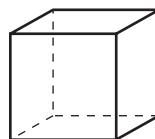
3. Kim traced the faces of 1 solid shape to draw the picture below. What solid shape did she use?



5. Ann traced the faces of a solid shape to make this figure. Which solid shape did Ann use?



2. Maya traced a face of the solid below. What plane shape does she draw?



4. I am a plane shape that can be made by tracing one of the 2 faces of a certain solid shape. Which plane shape am I?

6. The figure below was made by tracing the faces of 1 solid shape. Which solid shape was used?

